

Friday 22.1.21 Lesson

4 Complete the sentences.

a) 1 ten and 6 ones =

b) = 1 ten and 3 ones

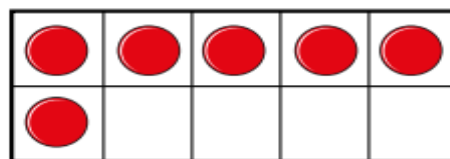
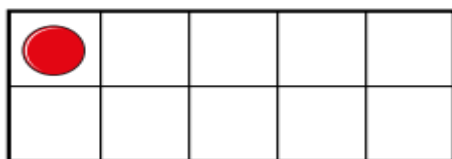
c) 15 = ten and ones

d) 2 tens =

e) 1 ten and 10 ones =

5 Is this true or false?

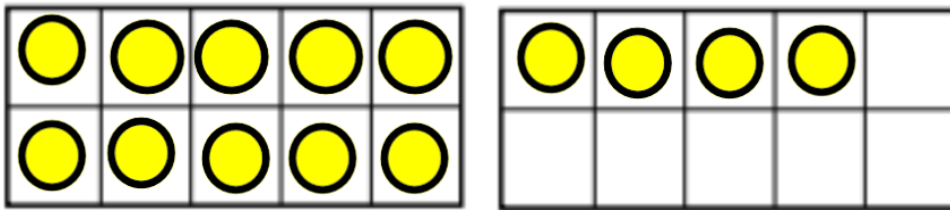
The ten frames show the number 16



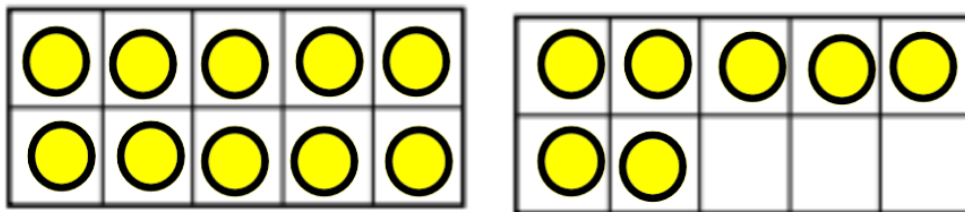
Explain your answer

Additional Questions

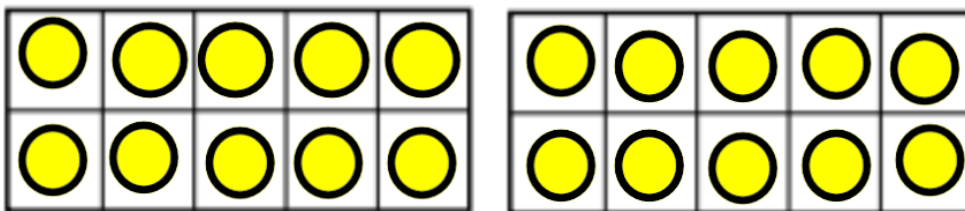
Complete the sentences




ten and ones is equal to



ten and ones is equal to



ten and ones is equal to



ten and ones is equal to